



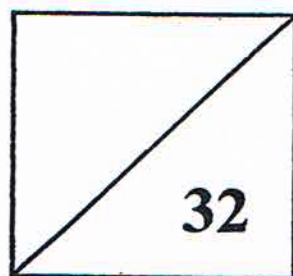
Established since 1930

RULANG PRIMARY SCHOOL

A Gallery of Scholars, A Vibrant Community of Wholesome Individuals

Name : _____ ()
Level : Primary One
Class : Primary 1 _____
Date : 13 October 2011
Setter : Ms Nooryanti Mohamed

SEMESTRAL REVIEW 2 PART 1 MATHEMATICS



TOTAL TIME: 30 minutes

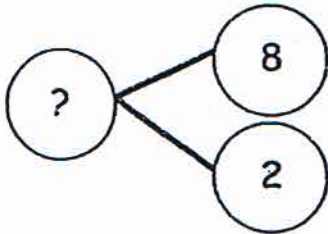
16 questions

32 marks

- DO NOT OPEN THIS BOOKLET UNTIL YOU ARE TOLD TO DO SO.
- READ ALL THE INSTRUCTIONS CAREFULLY.
- ANSWER ALL THE QUESTIONS.

Questions 1 to 16 carry 2 marks each. For each question, four options are given. One of these is the correct answer. Choose the correct answer and write its number (1, 2, 3 or 4) in the bracket provided. (32 marks)

1) What is the missing number in the number bond below?



- (1) 5
- (3) 7

- (2) 6
- (4) 10

()

2) Who is the third boy from the right?



Jordan



Peter



Xavier



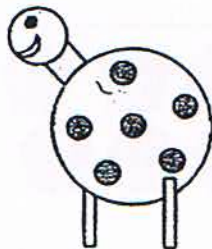
Nigel

- (1) Jordan
- (3) Xavier

- (2) Peter
- (4) Nigel

()

3) How many circles are there in the picture below?



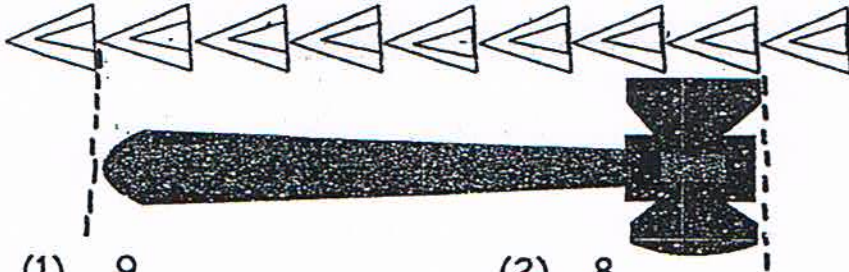
- (1) 10
- (3) 8

- (2) 9
- (4) 7

()

4) What is the length of the hammer below?

Use  as 1 unit.




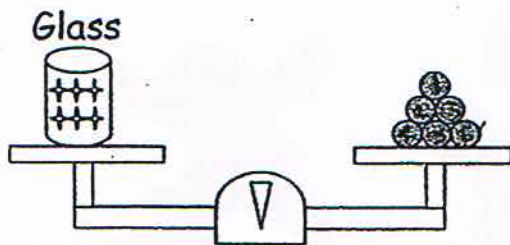
- (1) 9
- (3) 7

- (2) 8
- (4) 6

()

5) What is the mass of 2 such glasses?

Use  as 1 unit.




- (1) 5
- (3) 10


- (2) 6
- (4) 12

()

6) The pictures below show two trays of cupcakes. How many more cupcakes are there in Tray A than in Tray B?



Tray A



Tray B

- (1) 22 cupcakes
- (3) 6 cupcakes

- (2) 14 cupcakes
- (4) 4 cupcakes

()

7) The number 38 comes after .

What is the missing number in the box above?

(1) 40

(2) 39

(3) 37

(4) 36

()

8) What is the sum of 26 and 34?

(1) 60

(2) 52

(3) 50

(4) 8

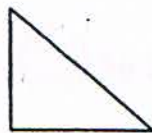
()

9) Which one of the following shapes has four equal sides?


(1)




(2)



(3)



(4)



()

10) is 12 less than 30.

What is the missing number in the box above?

(1) 42

(2) 22

(3) 18

(4) 12

()

11) - 53 = 18

What is the missing number in the box above?

(1) 71

(2) 70

(3) 45

(4) 35




()

12) Sally has 65 cents in her purse. She wants to buy a pen that costs \$1. How much more money does she need?

- (1) 30 cents (2) 35 cents
(3) 40 cents (4) 45 cents ()

13) Which one of the following has the greatest value?

- (1) 70 (2) 7 tens 5 ones
(3) 8 ones 2 tens (4) 69 ones ()

14)  +  = 38
 = 20

What is the value of ?

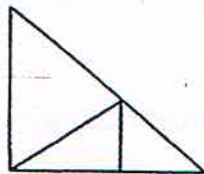
- (1) 58 (2) 52
(3) 18 (4) 12 ()

15)  +  +  = 15


What is  +  ?

- (1) 10 (2) 6
(3) 3 (4) 5 ()

16) How many triangles are there in the picture below?



- (1) 6 (2) 5
(3) 3 (4) 4 ()



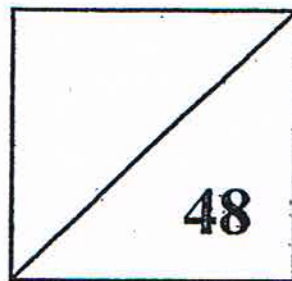
RULANG PRIMARY SCHOOL

A Gallery of Scholars, A Vibrant Community of Wholesome Individuals

Established since 1930

Name : _____ ()
Level : Primary One
Class : Primary 1 _____
Date : 2 November 2011
Setter : Ms Nooryanti Mohamed

SEMESTRAL REVIEW 2 PART 2 MATHEMATICS



TOTAL TIME: 45 minutes
21 questions
48 marks


- DO NOT OPEN THIS BOOKLET UNTIL YOU ARE TOLD TO DO SO.
- READ ALL THE INSTRUCTIONS CAREFULLY.
- ANSWER ALL THE QUESTIONS.

Questions 1 to 16 carry 2 marks each. For each of the following questions, write the correct answer in the box provided. (32 marks)

1) Write a multiplication sentence for the picture below.



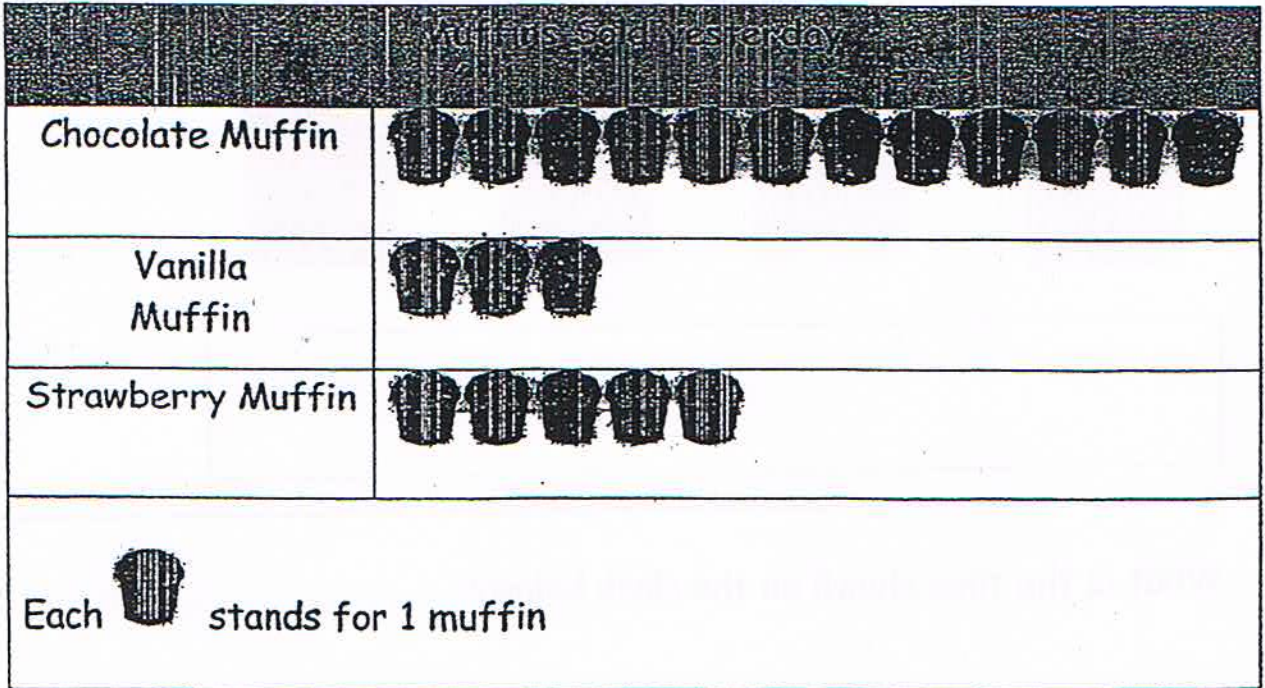
2) What is the time shown on the clock below?



3) Ailing bought a skirt for \$28 and a dress for \$39. How much did she spend in all?

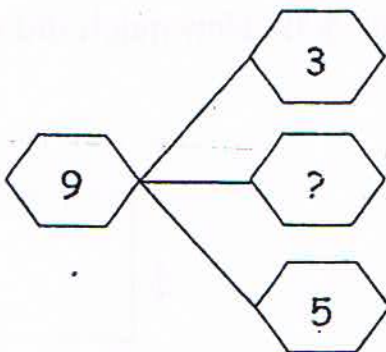
\$

- 4) The picture graph below shows the number of muffins Mrs Raju sold yesterday.



How many more chocolate muffins than the total number of vanilla and strawberry muffins did Mrs Raju sell?


- 5) What is the missing number in the number bond below?



- 6) Form the greatest 2-digit number by using only two of the digits given below.

, , ,


- 7) Write the correct subtraction sentence for the picture below.



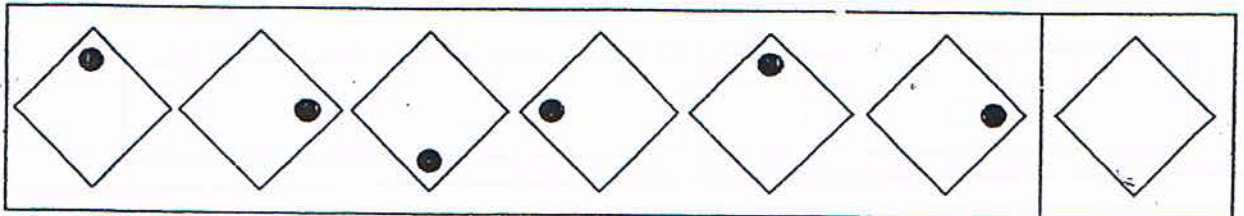
- 8) Subtract 13 from 50.

- 9) I am a 2-digit number that is greater than 31 but smaller than 40. If I add my two digits together, the answer is 9. What number am I?

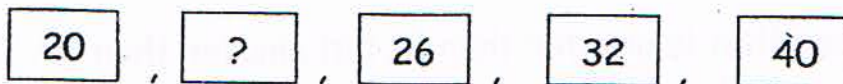
10) What is the missing number in the pattern below?



11) Study the pattern below. Where should the black dot on the last shape be? Draw a dot on the last shape to show its position.



12) Complete the number pattern below.
What is the missing number the box below?



13) When a smaller number is subtracted from a bigger number, the answer is 30. If the bigger number is 55, what is the smaller number?

14) $20 + 25 = \boxed{?} + 15$

What is the missing number in the box above?

15) Samuel has 18 green and yellow marbles. If he has an equal number of green and yellow marbles, how many yellow marbles does he have?

16) I am 10 years old this year. How old was I four years ago?

Questions 17 to 20 carry 3 marks each. Question 21 carries 4 marks. Answer each question in the space provided. Show your working clearly as marks will be awarded for relevant statements and correct answers.

(16 marks)

- 17) Danny has 15 stickers. Elsie has 18 stickers. How many stickers do they have altogether?

They have _____ altogether.

- 18) Anna shares 18 sweets with her 2 cousins. How many sweets will each of them get?

Each of them will get _____.

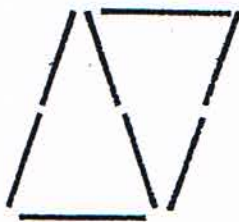
- 19) Jonas has 58 stamps. Nick has 19 fewer stamps than Jonas. How many stamps does Nick have?

Nick has _____.

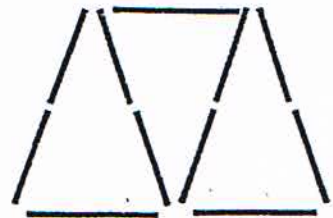
- 20) Susan used 5 toothpicks to make a triangle. How many toothpicks would she need to make 5 triangles?



1 triangle



2 triangles



3 triangles

She would need _____.

- 21) Aaron, Bobby and Caleb have some seashells. Bobby and Caleb have 15 seashells each. Aaron has 20 seashells more than the total number of seashells Bobby and Caleb have. How many seashells do they have altogether?

They have _____ altogether.

End - of - Paper

Answer Ke

EXAM PAPER 2011


SCHOOL : RULANG
SUBJECT : PRIMARY 1 MATHEMATICS

TERM : SA2

Q1	Q2	Q3	Q4	Q5	Q6	Q7	Q8	Q9	Q10	Q11	Q12	Q13	Q14	Q15	Q16
4	2	2	3	4	3	3	1	3	3	1	2	2	3	1	2

Part II

1) $4 \times 3 = 12$ 2) 2 o'clock 3) \$67 4) 4 5) 1

6) 5 7) $22 - 7 = 15$ 8) 37 9) 36 10) 4 11) 

12) 22 13) 25 14) 30 15) 9 16) 6

17) $15 + 18 = 33$
They have 33 stickers altogether.

18) $18 \div 3 = 6$
Each of them will get 6 sweets.

19) $58 - 19 = 39$
Nick has 39 stamps.

20) $11 + 3 + 3 = 17$
She would need 17 toothpicks.

21) They have 65 seashells altogether.